













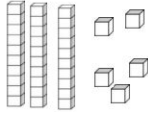

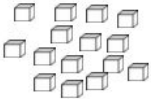

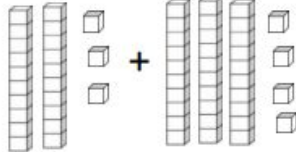



July Calendar 2017

July Calendar 2017				
Monday	Tuesday	Wednesday	Thursday	Friday
<p>3 What number should be added to the first number to make the answer?</p> <p style="text-align: center;">$6 + \underline{\quad} = 16$</p>	<p>4 Kevin has 15 . He gives some of them to Sarah. Kevin has 9  left. How many  does Kevin give to Sarah?</p>	<p>5 Four friends share a pizza. How is the pizza cut to make equal parts?</p> <div style="text-align: center;"></div>	<p>6 Compare. Choose $<$, $=$, or $>$.</p> <p style="text-align: center;">91 ? 91</p>	<p>7 Count on to add. What is 3 more than 52?</p>
<p>10 What is the difference?</p> <div style="text-align: center;"> $\begin{array}{r} 80 \\ - 10 \\ \hline \end{array}$ </div>	<p>11 Which subtraction fact would you use to find the missing addend?</p> <p style="text-align: center;">$7 + \underline{\quad} = 11$</p> <p>a. $11 - 7 = 4$ b. $4 + 7 = 11$ c. $7 - 4 = 3$</p>	<p>12 Erin has 7 . Mark has 1 . Which number sentence shows how many  they have in all?</p> <p>a. $7 + 1 = 8$ b. $7 - 1 = 6$ c. $7 - 6 = 1$</p>	<p>13 Which is the expanded form?</p> <div style="text-align: center;"></div> <p>a. $80 + 4$ c. $8 + 4$ b. $8 + 40$ d. $80 + 40$</p>	<p>14 Solve these facts in 25 seconds! Ready, Set, Go!!!!</p> <p>$8 + 2 = \underline{\quad}$ $10 - 7 = \underline{\quad}$ $6 + 3 = \underline{\quad}$ $7 - 5 = \underline{\quad}$</p>
<p>17 Toni sees a real object that has 5 corners and 5 sides. Which object does Toni see?</p> <div style="display: flex; justify-content: space-around;"> <div style="text-align: center;">a. </div> <div style="text-align: center;">b. </div> </div> <div style="display: flex; justify-content: space-around; margin-top: 10px;"> <div style="text-align: center;">c. </div> <div style="text-align: center;">d. </div> </div>	<p>18 Write the numbers in order from least to greatest.</p> <p style="text-align: center;">92, 95, 94, 93</p>	<p>19 Add. Count on by ones. What is the sum?</p> <p style="text-align: center;">$61 + 3 = \underline{\quad}$</p>	<p>20 Find the missing addend.</p> <p style="text-align: center;">$\underline{\quad} + 3 = 8$</p>	<p>21 Write the number of tens and ones.</p> <p style="text-align: center;">$29 = \underline{\quad}$ tens + $\underline{\quad}$ ones</p>
<p>24 Write the correct symbol ($<$, $>$ or $=$)</p> <p style="text-align: center;">26 $\underline{\quad}$ 18</p>	<p>25 Find the missing number:</p> <p style="text-align: center;">$\underline{\quad} - 10 = 70$</p>	<p>26 Find the sum.</p> <p style="text-align: center;">$3 + 9 + 2 + \underline{\quad}$</p>	<p>27 How many nickels?</p> <div style="text-align: center;"></div>	<p>28 Adam has five more apples than Jackie. Jackie has nine apples. How many apples does Adam have?</p>

August Calendar 2017

<p>31</p> <p>Write the time shown on the clock.</p> 	<p>1</p> <p>Solve these facts in 20 seconds Ready, Set, Go!!</p> <p>$7 + 3 = \underline{\quad}$</p> <p>$8 - 2 = \underline{\quad}$</p> <p>$4 + 5 = \underline{\quad}$</p> <p>$9 - 6 = \underline{\quad}$</p>	<p>2</p> <p>Find the number of blocks.</p>  <p>= $\underline{\quad}$ tens + $\underline{\quad}$ ones</p> <p>= $\underline{\quad}$</p>	<p>3</p> <p>Draw a lines to divide this shape into 2 equal parts</p> 	<p>4</p> <p>There are 6 birds and 3 nests. How many more birds are there than nests?</p>												
<p>7</p> <p>Draw rods (tens) and blocks (ones) to represent the number</p> <p style="text-align: center;">42</p>	<p>8</p> <p>Find the sum</p> <p>$60 + 30 = \underline{\quad}$</p>	<p>9</p> <p>Brian has four more plums than Paul. Paul has seven plums. How many plums does Brian have?</p>	<p>10</p> <p>Find the difference.</p> <p>$36 - 6 = \underline{\quad}$</p>	<p>11</p> <p>Fill in the correct tens and ones</p> <p><input style="width: 20px; height: 20px;" type="text"/> tens and <input style="width: 20px; height: 20px;" type="text"/> ones = 83</p>												
<p>14</p> <p>Redraw the blocks as sets of tens and ones. Write the number of blocks.</p>  <p>= $\underline{\quad}$ = $\underline{\quad}$</p>	<p>15</p> <p style="text-align: center; font-size: small;">Our Favorite Ice Cream Flavor</p> <table border="1" style="width: 100%; border-collapse: collapse; text-align: center;"> <thead> <tr> <th style="width: 30%;">Flavor</th> <th style="width: 40%;">Tally Marks</th> <th style="width: 30%;">#</th> </tr> </thead> <tbody> <tr> <td>chocolate</td> <td> </td> <td></td> </tr> <tr> <td>vanilla</td> <td> </td> <td></td> </tr> <tr> <td>strawberry</td> <td> </td> <td></td> </tr> </tbody> </table> <p>How many more people like chocolate than vanilla?</p>	Flavor	Tally Marks	#	chocolate			vanilla			strawberry			<p>16</p> <p>Is the shape split into halves or quarters?</p> 	<p>17</p> <p>Find the sum</p>  <p>= $\underline{\quad}$</p>	<p>18</p> <p>Write the time shown on the clock.</p> 
Flavor	Tally Marks	#														
chocolate																
vanilla																
strawberry																
<p>21</p> <p>Marcie has seven more marbles than Marin. Marin has 21 marbles. How many marbles does Marcie have?</p>	<p>22</p> <p>Find the sum</p> <p>$1 + 6 + 4 = \underline{\quad}$</p>	<p>23</p> <p>Solve these in 15 seconds. Ready, Set, Go!!</p> <p>$4 + 3 = \underline{\quad}$</p> <p>$9 - 5 = \underline{\quad}$</p> <p>$2 + 7 = \underline{\quad}$</p> <p>$10 - 2 = \underline{\quad}$</p>	<p>24</p> <p>Write the correct symbol (<, > or =)</p> <p>9 $\underline{\quad}$ 15</p>	<p>25</p> <p>Find the missing number</p> <p>$10 + \underline{\quad} = 80$</p>												